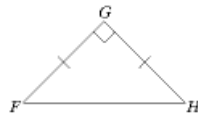
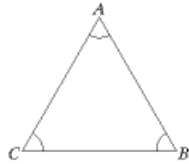
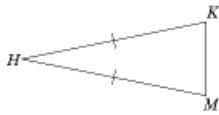
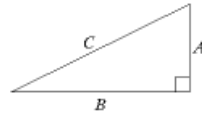
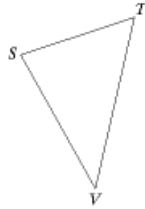
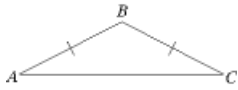


# Geometry Triangles Quiz 1 Classifying

## Other

1. Name the Triangle as specifically as possible (both angle & sides).



**Geometry Triangles Quiz 1 Classifying  
Answer Section**

**OTHER**

1. ANS:  
obtuse isosceles  
acute scalene  
right scalene  
acute isosceles  
equilateral / equiangular  
right isosceles

PTS: 1